

برای خطوط و صفحاتی که دو تصویر از آن‌ها رسم شده است، تصویر سوم را به کمک رابط بین تصاویر رسم کنید.

<p>1</p>	<p>2</p>
<p>3</p>	<p>4</p>
<p>5</p>	<p>6</p>

1

2

The image contains two technical drawing exercises on a grid. Exercise 1 shows three views of a part: a top view (top-left), a front view (bottom-left), and a side view (right). The top view is a rectangle with a notch on the right side. The front view shows a profile with a sloped top surface and a notch on the right. The side view is a simple rectangle. Exercise 2 shows three views of a different part: a top view (top-left), a front view (bottom-left), and a side view (right). The top view is a complex shape with a sloped top surface and a notch on the right. The front view shows a profile with a sloped top surface and a notch on the right. The side view is a simple rectangle.

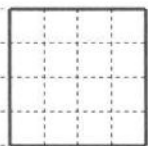
۲۴



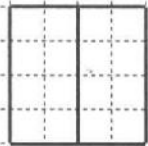
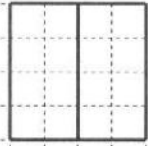
نکیف کلاس ۷۹
نقشه کشی و نقشه خوانی

شماره دانش آموزی: _____
نام و نام خانوادگی: _____
روز: _____
گروه آموزشی: _____

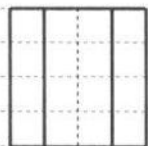
1



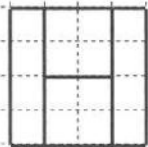
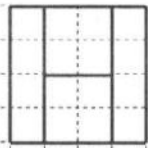
2



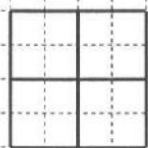
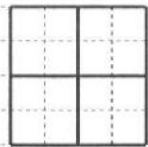
3



4

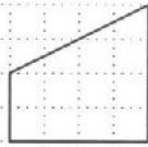
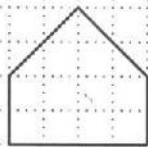
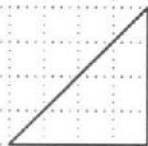

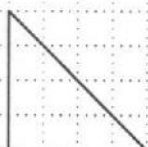
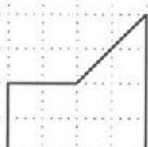

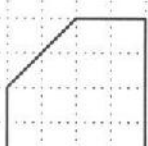
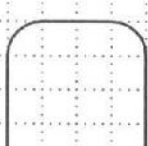

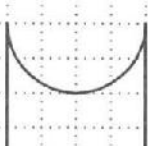






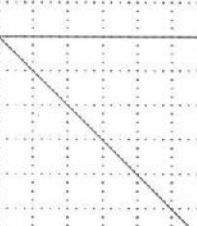


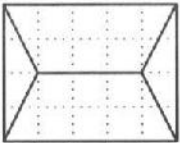

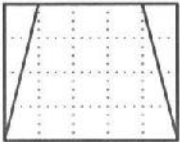

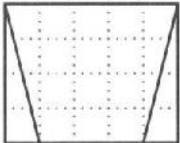
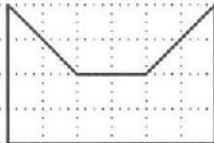
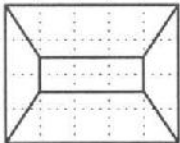
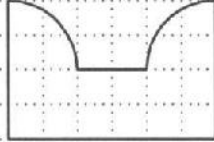
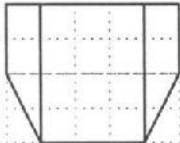
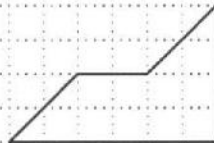
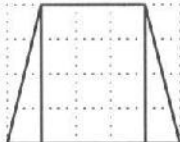

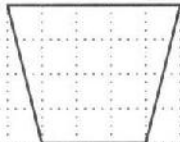



5



تصویر سوم اجسام فوق را رسم کنید. (۶ جواب)


۱) نمای چپ اجسام زیر را که نمای بالای آنها یکسان است رسم کنید.

تصویر از جلو	تصویر از چپ	تصویر از جلو	تصویر از چپ
			
			
			
			
			
			
			
			
تصویر از بالا		تصویر از بالا	

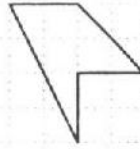
تصویر از جلو	تصویر از چپ	تصویر از جلو	تصویر از چپ
			
			
			
			
			
			
			
			
تصویر از بالا		تصویر از بالا	

۲۷ ✓

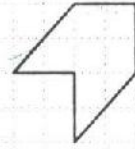
تصویرهای جلو و چپ برای ده جسم یکسان است. تصویر بالای صحیح هر جسم را از هجده تصویر رسم شده، انتخاب کرده، شماره آن را در جای مربوطه بنویسید.



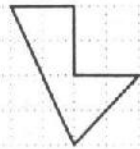
1



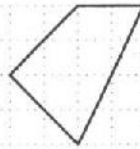
2



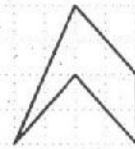
3



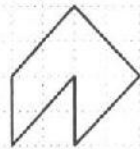
4



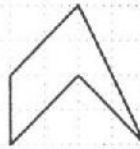
5



6



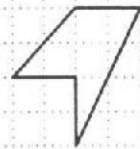
7



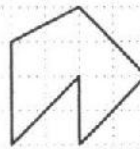
8



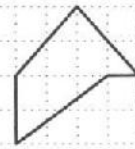
9



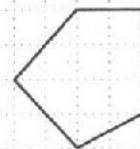
10



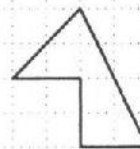
11



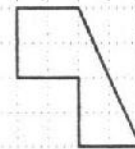
12



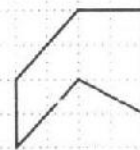
13



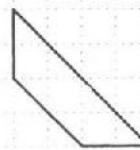
14



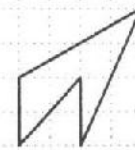
15



16



17



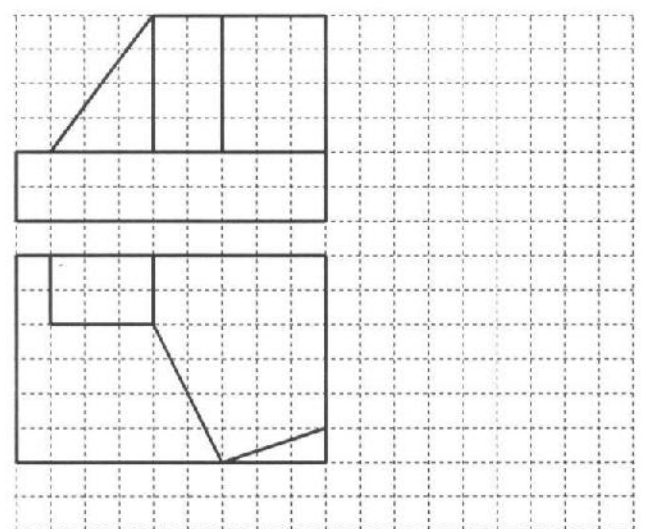
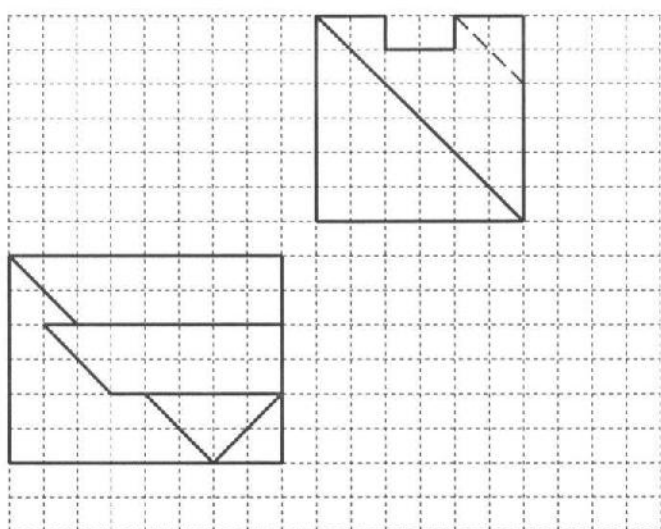
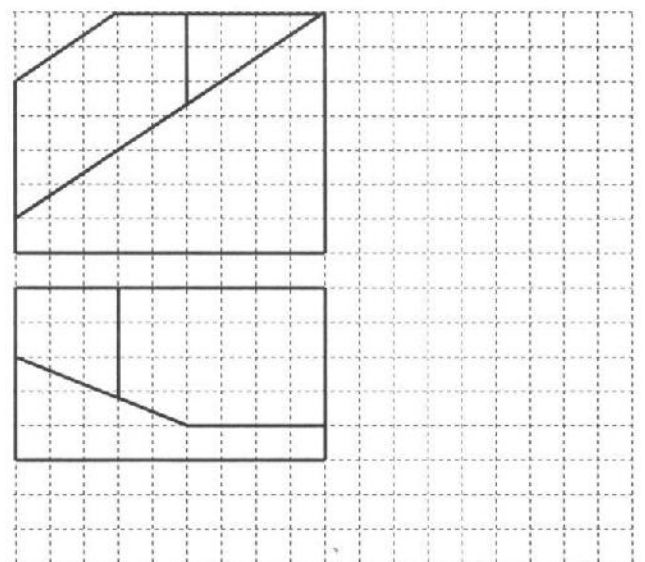
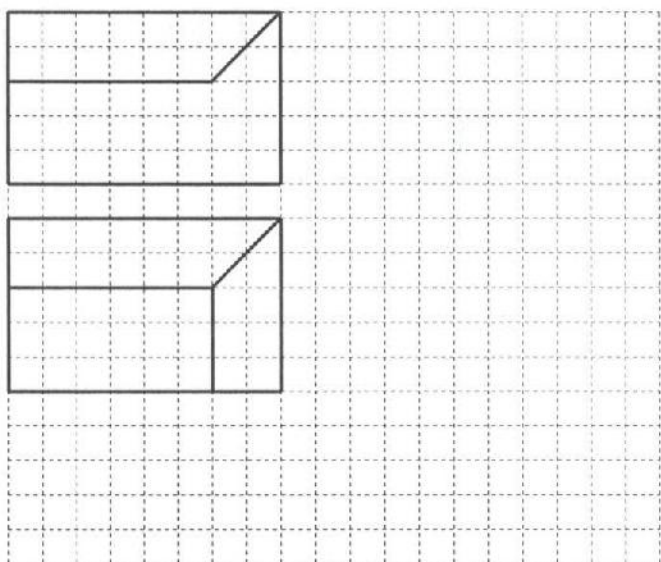
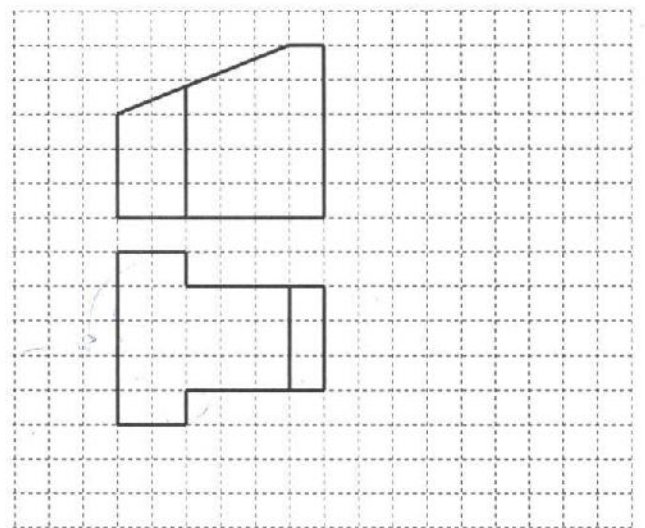
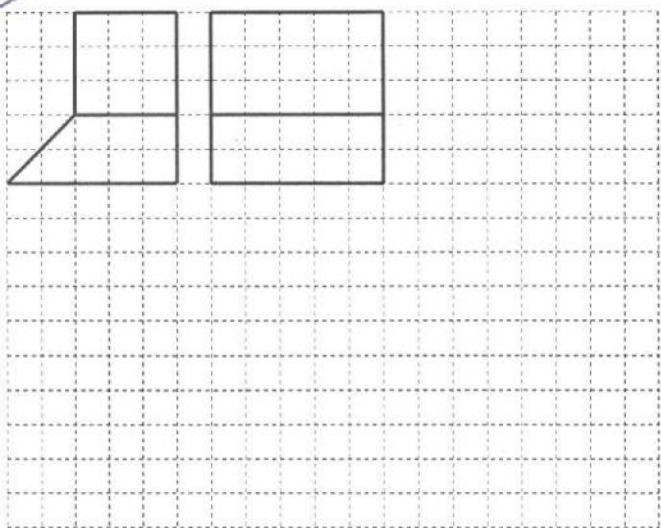
18

نمای سوم اجسام زیر را به روش آنالیز سطوح رسم کنید.

1

2

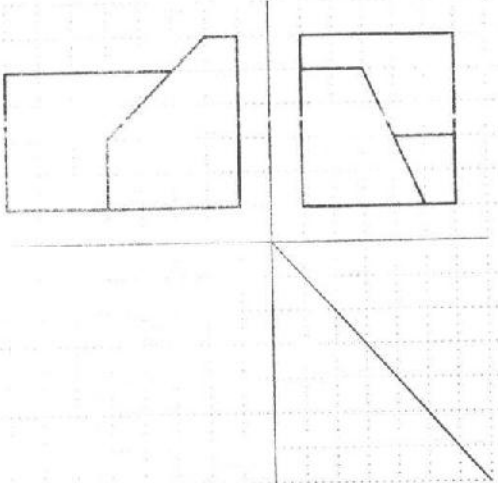
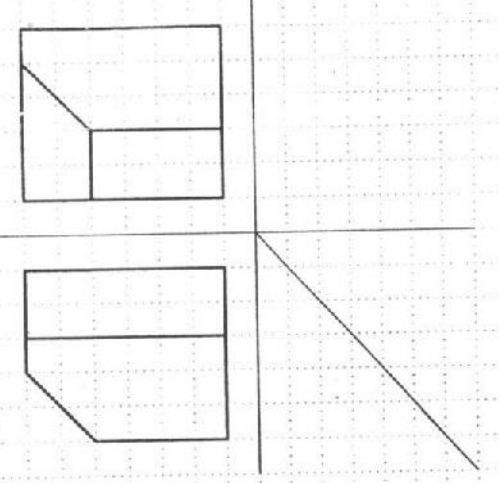
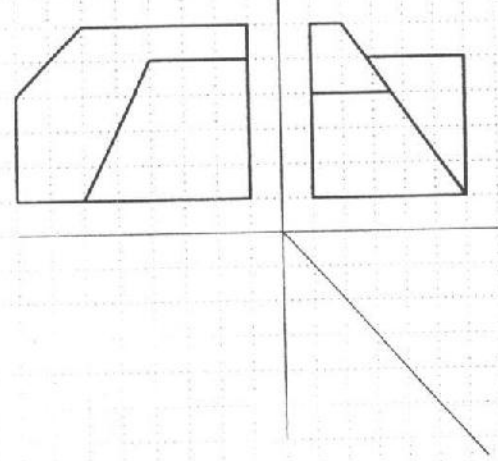
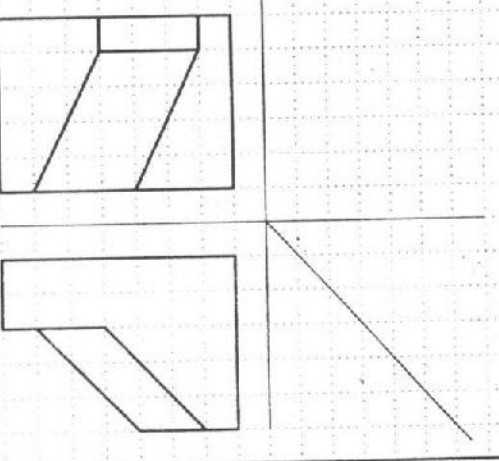
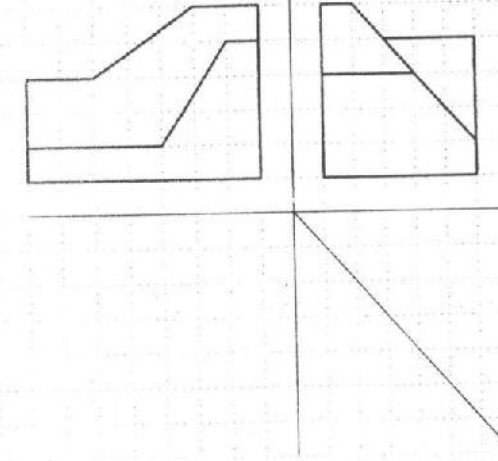
۳۳



تصویر سوم اجسام زیر را به روش آنالیز سطوح رسم نمایید. حروف نام گذاری صفحات را پاک نکنید.

۳۵

دو تصویر از هر جسم رسم شده است. تصویر سوم را از طریق آنالیز سطح‌ها رسم کنید.

<p>1</p> 	<p>2</p> 
<p>3</p> 	<p>4</p> 
<p>5</p> 	<p>6</p> 